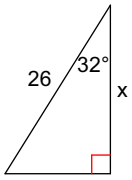


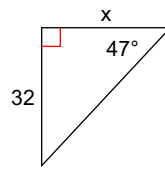
WS 4.2.1

Find the length of the missing side. Round to the nearest tenth.

1)



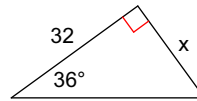
2)



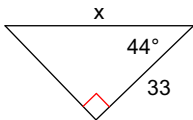
3)



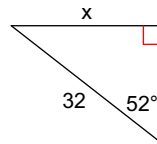
4)



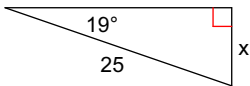
5)



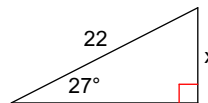
6)



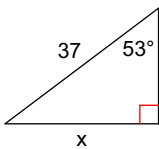
7)



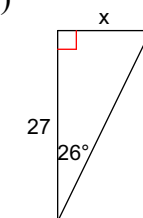
8)



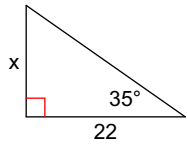
9)



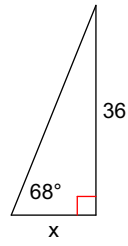
10)



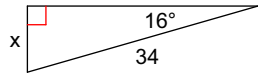
11)



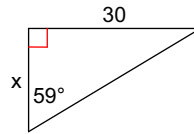
12)



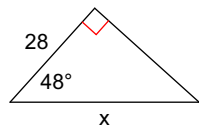
13)



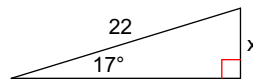
14)



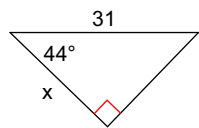
15)



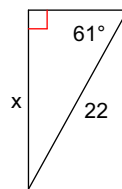
16)



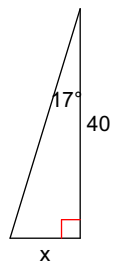
17)



18)



19)



20)

